


Objective: Students can name & recognize the colors red, yellow and blue.

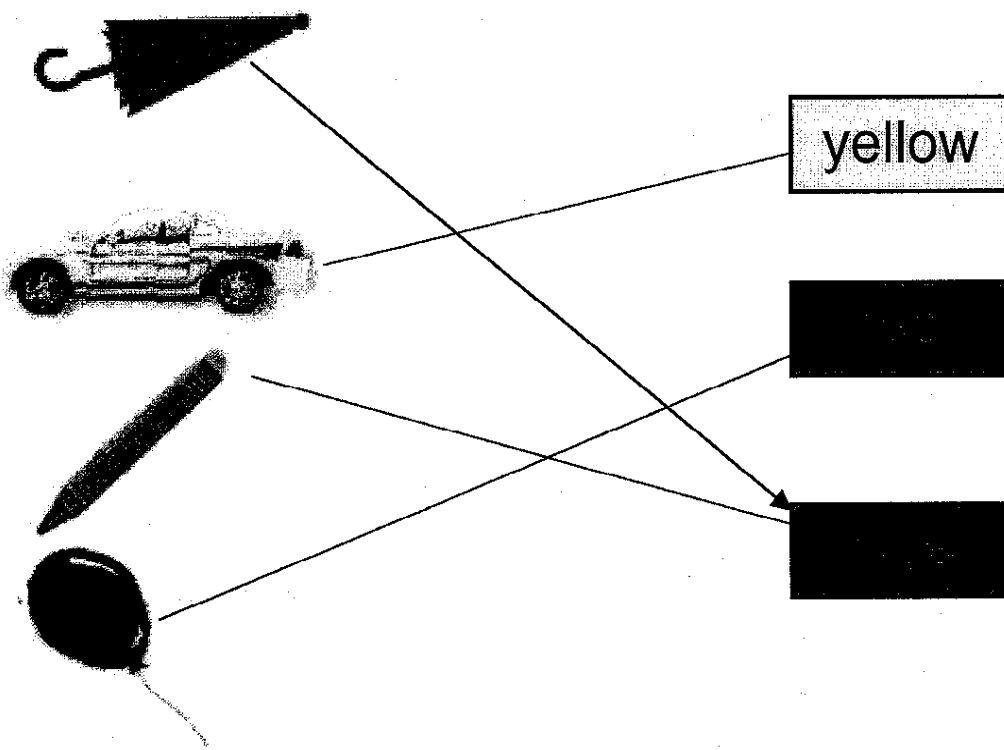
Look at the pictures.



Practice

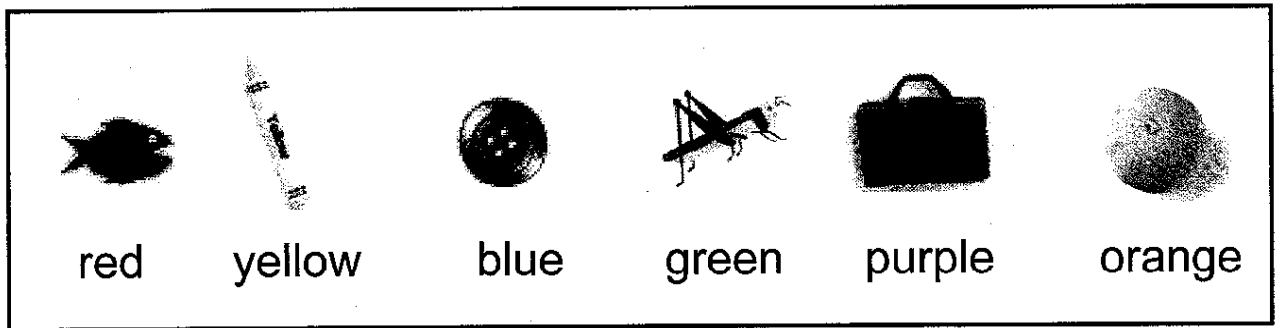
Match the colors with objects.

NB Class 1 is
in colour




Objective: Students can identify the colors green, orange, purple, red, yellow and blue.

Look at the pictures.



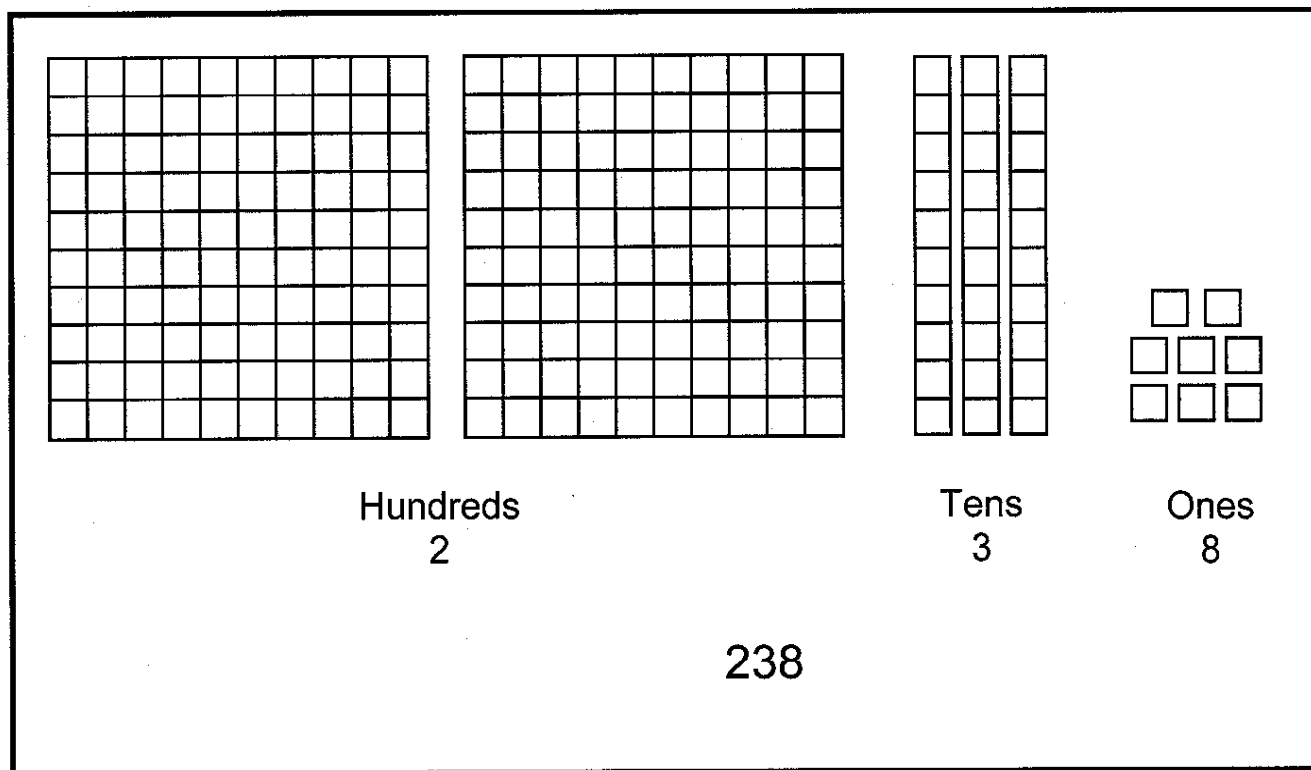
Practice

Match the colors with the following objects.



Objective: Review of place value up to hundred.

Study the following.



Practice

1. Write the missing number:



2. How many hundreds, how many tens and how many ones?

948	9 Hundreds 4 Tens 8 Ones
114	
226	
895	

3. Compare using < or >

$$\underline{246} < \underline{264}$$

$$\underline{437} \quad \underline{743}$$

$$\underline{956} \quad \underline{965}$$

4. Write the numbers in order from the greatest to the smallest.

685 , 845 , 719

5. Write the numbers in order from the smallest to the greatest.

241 , 821 , 341 , 265

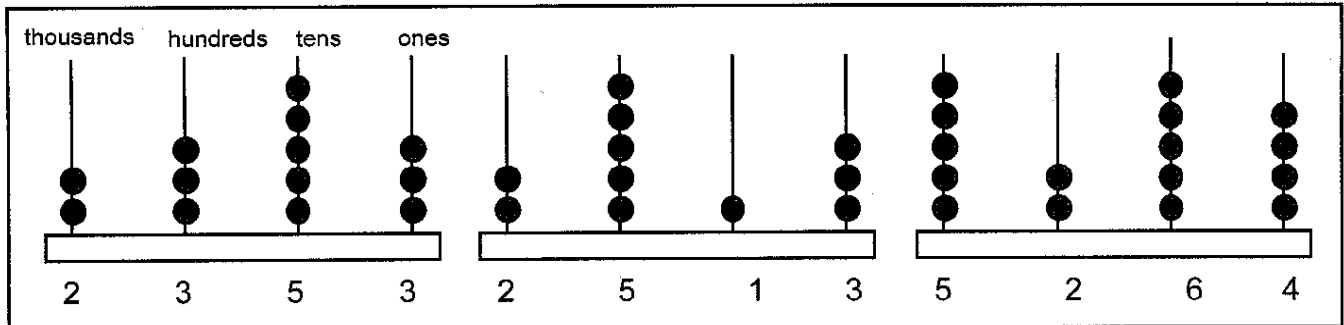
6. Write the greatest three-digit number possible with these three digits

4 , 9 , 6 _____

7. Write the smallest three-digit number possible with these three digits 3, 1, 5.

Objective: Review place value up to 1000.

Study



Practice

1. Write the number before and the number after.

Example: 5844 5845 5846

- a. _____ 8954 _____
- b. _____ 9745 _____

2. Compare the following numbers using > and <.

Example: 8721 8271

- a. 9645 7375
- b. 4354 3245

3. Write the following numbers in words.

Example: 1454 One thousand four hundred and fifty four

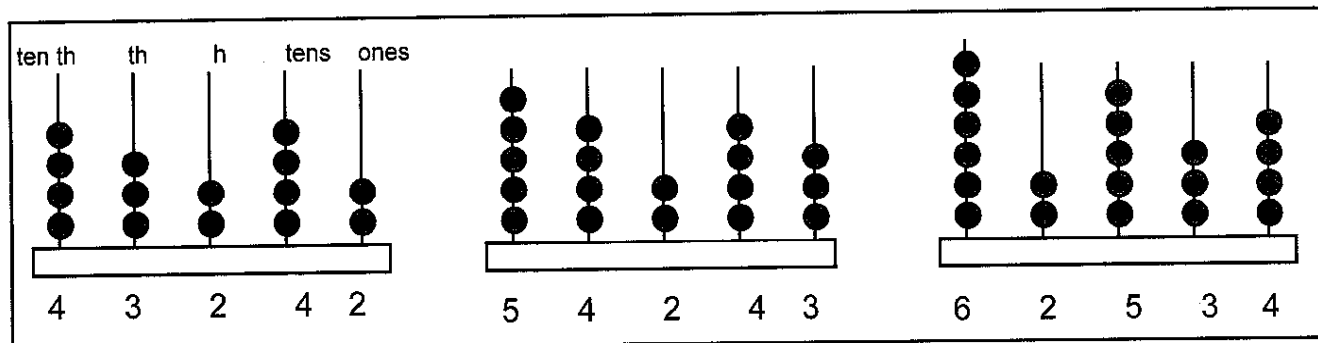
- a. 5456
- b. 8759
- c. 9241

4. Write the dates in the following sentences in numbers.

- a. Rehman Baba was born in one thousand and forty two.
- b. Independence date of Afghanistan is twelve hundred and ninety eight.
- c. Hazrat Mohammad was born in five hundred and seventy one.

Objective: Review place value up to ten thousand.

Study



Practice

1. Write the missing numbers.

a.

18,964
18,966

b.

26,454

c.

39,998

2. a. Write a number with six in the ten thousand place. All the digits in the the number must be different.
- b. Write a number with nine in the hundreds place. Make two digits in the number the same.
- c. Write a number with eight in the tens place. Make two digits in the number the same.
- d. Write a number with two in the ones place. Make three digits in the number the same.

3. Order the numbers from biggest to smallest.

15625, 19126, 26274

4. Order the numbers from smallest to biggest.

56718, 84562, 21989

5. The table shows how many students are enrolled in four schools.

School	Students
Malalai	15.112
S.Jamaluddin Afghani	17.981
Mirwais Nika	16.713
Zarghoona	19.854

a. Which school has the most students?

b. Which school has the fewest students?

c. Which school has more than 16,000 students?

d. Which school has less than 15,000 students?
